



1. Name 3 chemical species isoelectronic with Ne.


2. Name the following ions:



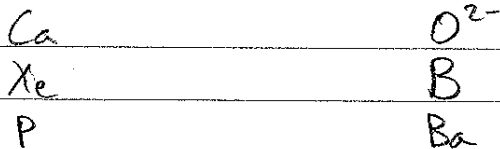
3. Name the following ionic compounds:



4. Provide chemical formulas for the following:



5. Draw the Lewis dot structure of the following atoms or ions:



6. Order the following from lowest to highest ionization energy:

